

6. (한 자리 수) × (두 자리 수)

[01 ~ 09] 계산해 보세요.

01 
$$\begin{array}{r} 7 \\ \times 36 \\ \hline \end{array}$$

02 
$$\begin{array}{r} 4 \\ \times 53 \\ \hline \end{array}$$

03 
$$\begin{array}{r} 6 \\ \times 48 \\ \hline \end{array}$$

04 
$$\begin{array}{r} 3 \\ \times 65 \\ \hline \end{array}$$

05 
$$\begin{array}{r} 8 \\ \times 27 \\ \hline \end{array}$$

06 
$$\begin{array}{r} 5 \\ \times 67 \\ \hline \end{array}$$

07 
$$\begin{array}{r} 9 \\ \times 28 \\ \hline \end{array}$$

08 
$$\begin{array}{r} 6 \\ \times 56 \\ \hline \end{array}$$

09 
$$\begin{array}{r} 7 \\ \times 43 \\ \hline \end{array}$$

[10 ~ 13] 빈칸에 알맞은 수를 써넣으세요.

10  $2 \times 94 = \square$

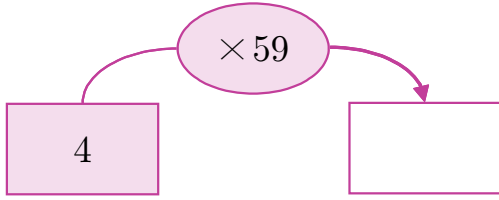
11  $8 \times 54 = \square$

12  $5 \times 39 = \square$

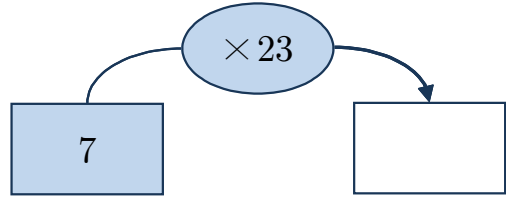
13  $6 \times 29 = \square$

[14~17] 빈칸에 알맞은 수를 써넣으세요.

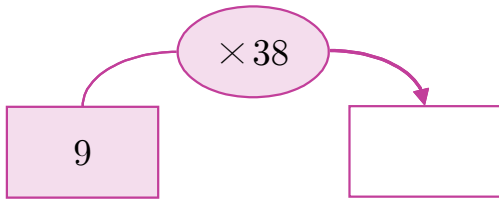
14



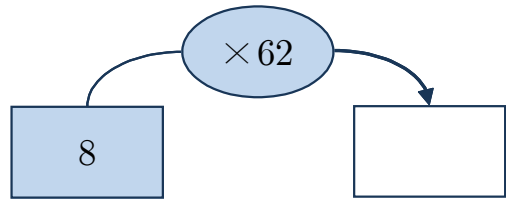
15



16

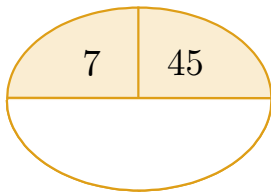


17

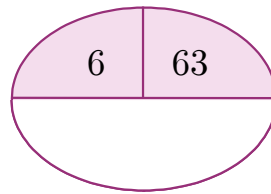


[18~19] 빈칸에 두 수의 곱을 써넣으세요.

18



19



20 계산 결과를 찾아 선으로 이어 보세요.

$9 \times 46$  •

$6 \times 64$  •

384

404

414

[01 ~ 09] 계산해 보세요.

$$\begin{array}{r} 01 \quad \quad 7 \\ \times 36 \\ \hline 252 \end{array}$$

$$\begin{array}{r} 02 \quad \quad 4 \\ \times 53 \\ \hline 212 \end{array}$$

$$\begin{array}{r} 03 \quad \quad 6 \\ \times 48 \\ \hline 288 \end{array}$$

$$\begin{array}{r} 04 \quad \quad 3 \\ \times 65 \\ \hline 195 \end{array}$$

$$\begin{array}{r} 05 \quad \quad 8 \\ \times 27 \\ \hline 216 \end{array}$$

$$\begin{array}{r} 06 \quad \quad 5 \\ \times 67 \\ \hline 335 \end{array}$$

$$\begin{array}{r} 07 \quad \quad 9 \\ \times 28 \\ \hline 252 \end{array}$$

$$\begin{array}{r} 08 \quad \quad 6 \\ \times 56 \\ \hline 336 \end{array}$$

$$\begin{array}{r} 09 \quad \quad 7 \\ \times 43 \\ \hline 301 \end{array}$$

[10 ~ 13] 빈칸에 알맞은 수를 써넣으세요.

$$10 \quad 2 \times 94 = \boxed{188}$$

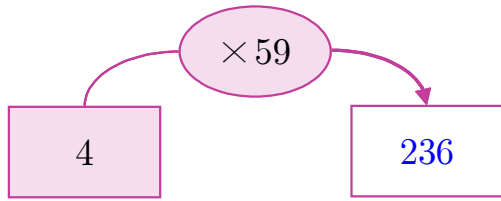
$$11 \quad 8 \times 54 = \boxed{432}$$

$$12 \quad 5 \times 39 = \boxed{195}$$

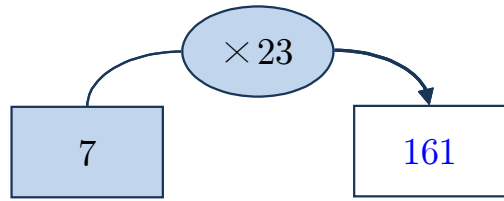
$$13 \quad 6 \times 29 = \boxed{174}$$

[14~17] 빈칸에 알맞은 수를 써넣으세요.

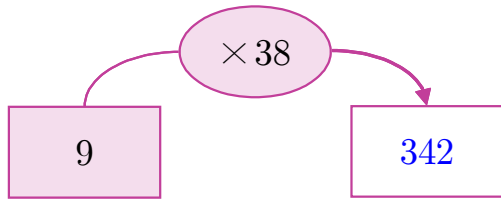
14



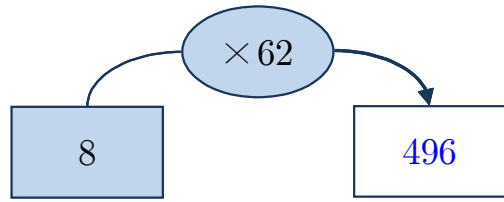
15



16

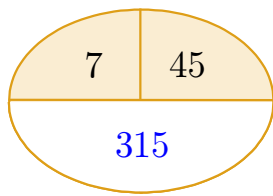


17

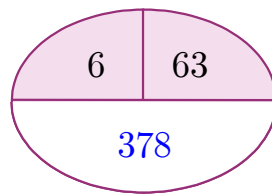


[18~19] 빈칸에 두 수의 곱을 써넣으세요.

18



19



20 계산 결과를 찾아 선으로 이어 보세요.

